
















# Counting Money

**Instructions:** Count the amount of money in each purse.

|   |  |   |
|---|--|---|
| 1 |  $+$      |    |
| 2 |  $+$      |    |
| 3 |  $+$  |  |
| 4 |  $+$  |  |
| 5 |  $+$  |  |



|    |   |   |  |   |
|----|---|---|--|---|
| 6  |    | + |    |    |
| 7  |    | + |    |    |
| 8  |    | + |   |   |
| 9  |  | + |  |  |
| 10 |  | + |  |  |
| 11 |  | + |  |  |