

















Find the Missing Number

Instructions: Write the missing number in each seashell so that the multiplication sentences are equal on both sides.

1	3	×		=	5	×	6
2	9	×	2	=		×	3
3		×	6	=	3	×	10
4	12	×		=	10	×	6
5	6	×	8	=	12	×	
6	5	×	8	=		×	4
7	8	×	2	=	4	×	
8		×	6	=	9	×	8
9	5	×	4	=		×	10



10	12	×	5	=	6	×	
11		×	4	=	8	×	3
12	2	×		=	6	×	3
13	6	×	12	=	8	×	
14	10	×	4	=		×	5
15	2	×	12	=	3	×	
16	6	×		=	3	×	4
17		×	1	=	4	×	3
18	4	×	10	=	8	×	
19	12	×		=	6	×	10
20	3	×	6	=	9	×	